







Let's Find the Total



- Look at the ①st picture and count the number of  that are on the shore.
- Look at the ②nd picture and count the number of  that are on the fishing line.
- Look at the ③rd picture and count how many  there are in TOTAL.
- Fill in the same number of  as the TOTAL number of  that  has caught.
- Write the number in the .



3

+

4



=
