






# Let's Add Equal Numbers



- Write the number of  in the .
- Write the number of  in the .
- Add the number of  and  then write the total number in the last  above the .

