




What Does It Look Like From Above?

- Look at each set of blocks.
- Think about what each set of blocks would look like from ABOVE.
- Draw a line  from each set of blocks to what it would look like from ABOVE.

